


# Весёлые задачи.













5

6

8




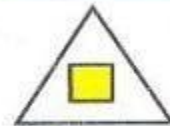

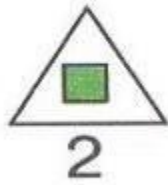





<b>7</b>	
<i>1</i>	<i>6</i>
<i>2</i>	<i>5</i>
<i>3</i>	<i>4</i>
<i>4</i>	<i>3</i>
<i>5</i>	<i>2</i>
<i>6</i>	<i>1</i>



7\* Выбери нужную фигуру из пронумерованных:




7 7 7 7 7

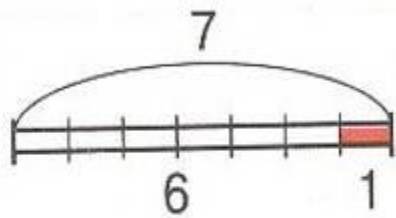
11 12 13 14



11 12 13 14



1

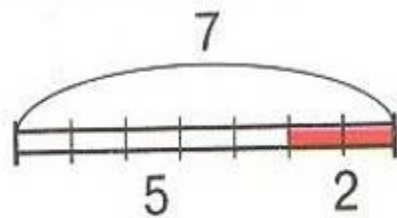


$$6 + 1 = 7$$

$$1 + 6 = 7$$

$$7 - 6 = 1$$

$$7 - 1 = 6$$

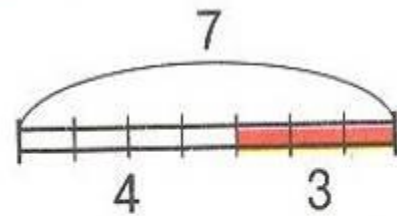


$$5 + 2 = 7$$

$$2 + 5 = 7$$

$$7 - 2 = 5$$

$$7 - 5 = 2$$




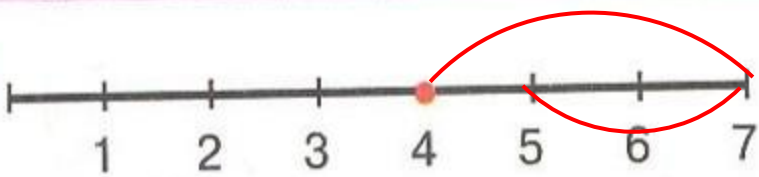
$$4 + 3 = 7$$

$$3 + 4 = 7$$

$$7 - 4 = 3$$

$$7 - 3 = 4$$

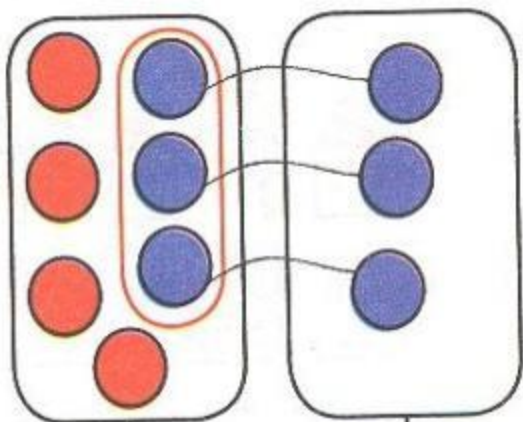
2



$$4 + 3 - 2 = 5$$

$$7 - 5 + 3 = 5$$

3




7

>

3


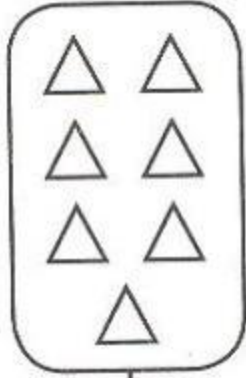
>, <, =



3

<


7



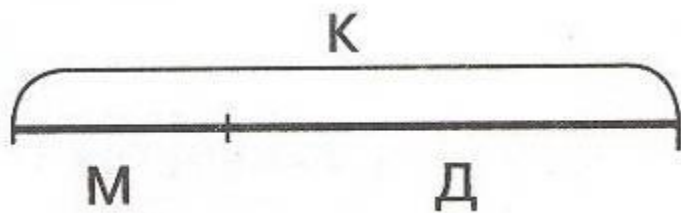
7

>

2



4



$$М + Д = \boxed{К}$$


$$\boxed{К} - \boxed{М} = \boxed{Д}$$

$$\boxed{Д} + \boxed{М} = \boxed{К}$$

$$\boxed{К} - \boxed{Д} = \boxed{М}$$









**Беляева Наталья Ивановна, МОУ-СОШ №4 г. Асино, Томская область.**