



<http://pedsovet.su/>

*Устный счёт в пределах  
10*





# Повтори состав числа




5

6

7


8

9





# *Реши примеры*





5

?

2

5

?

3

5

?

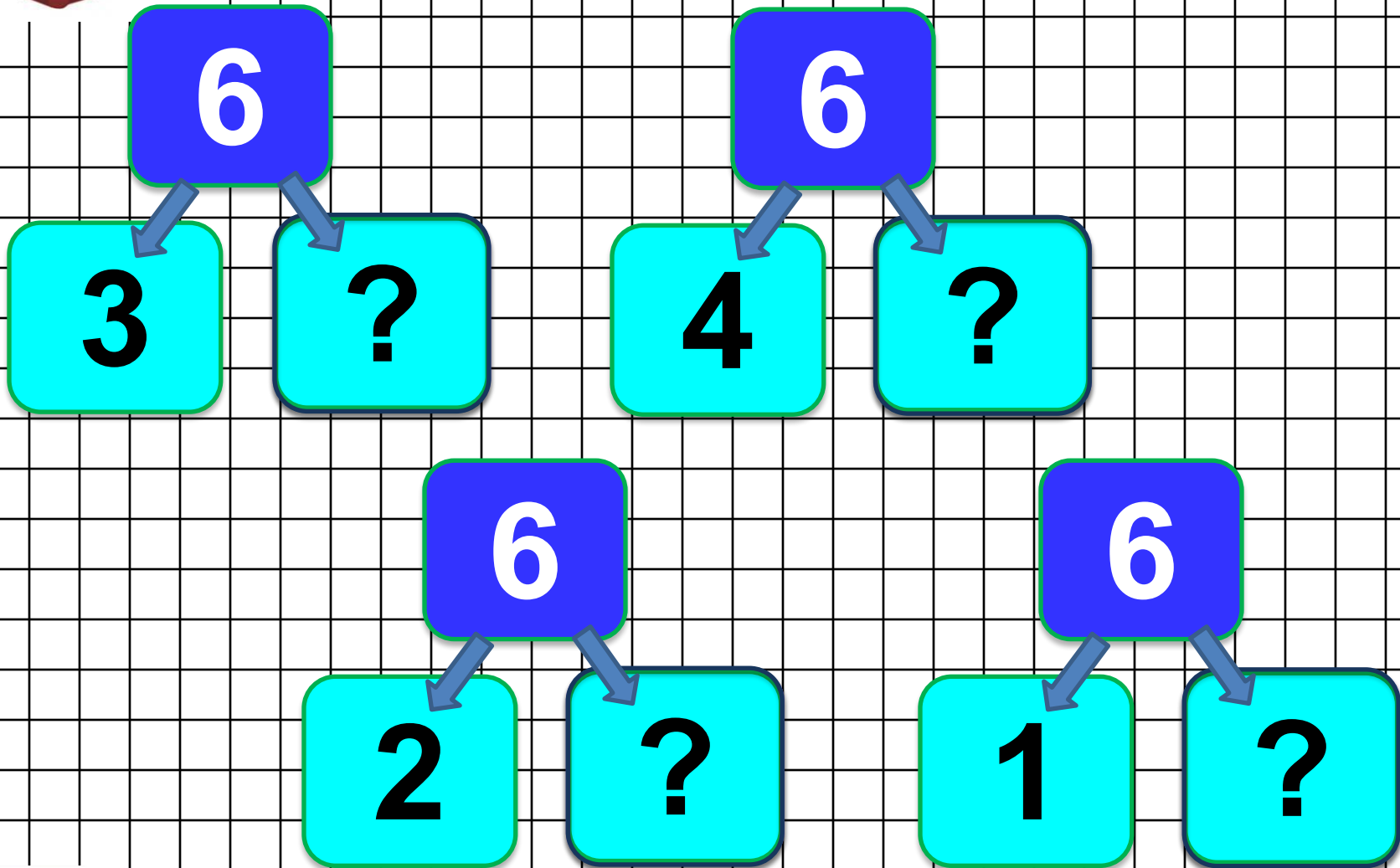
4

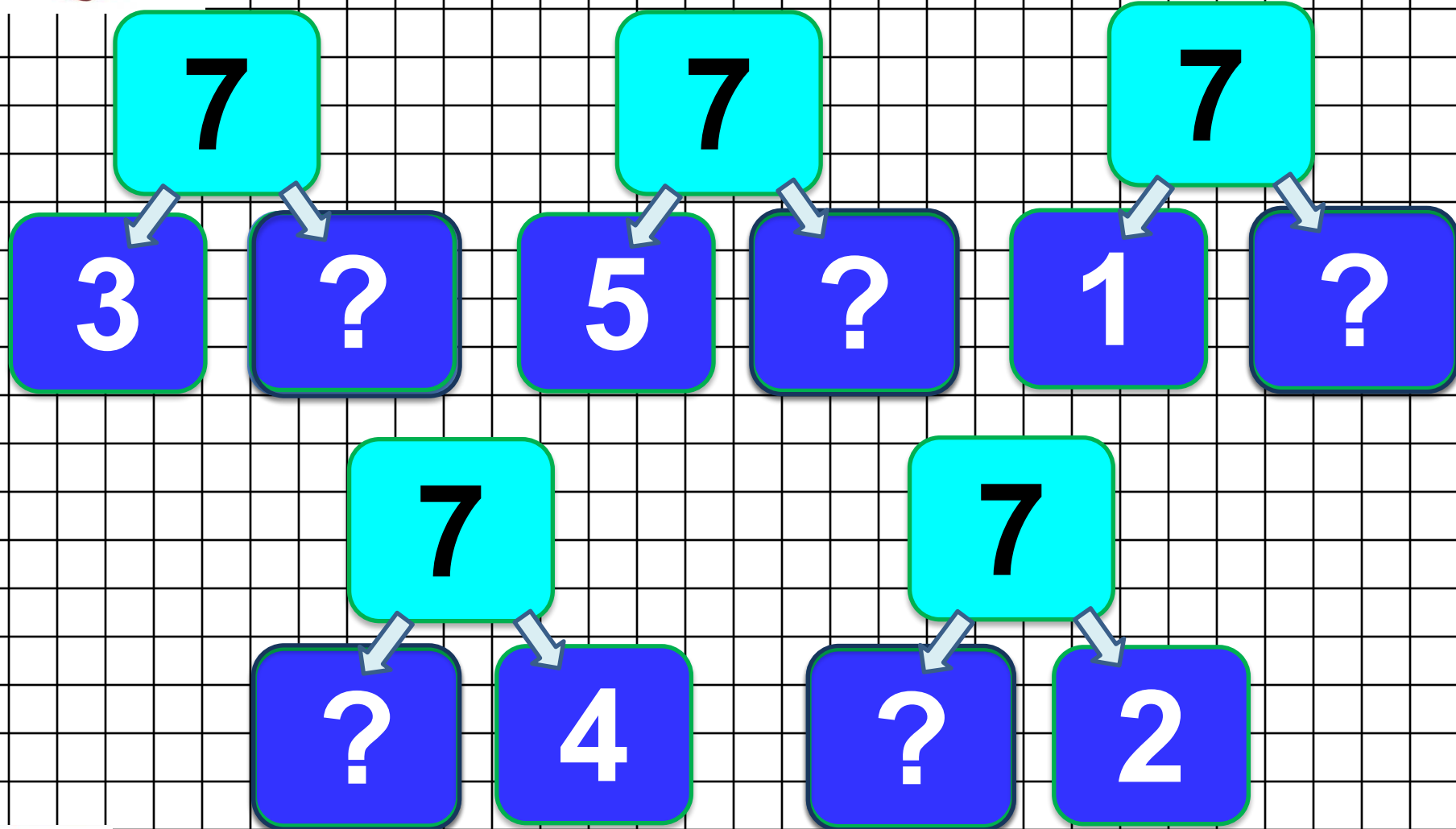
5

?

1

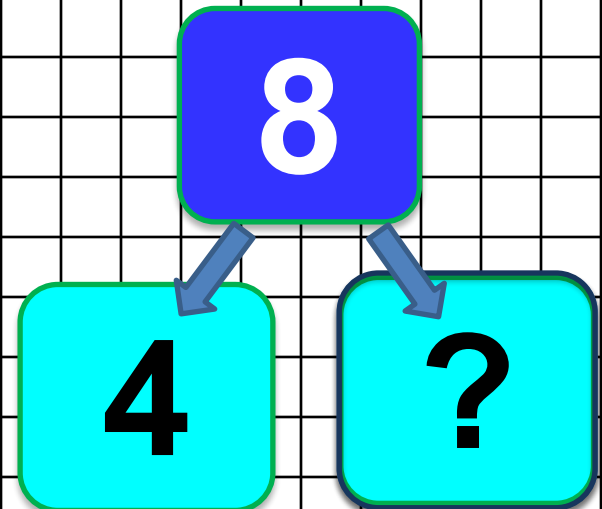
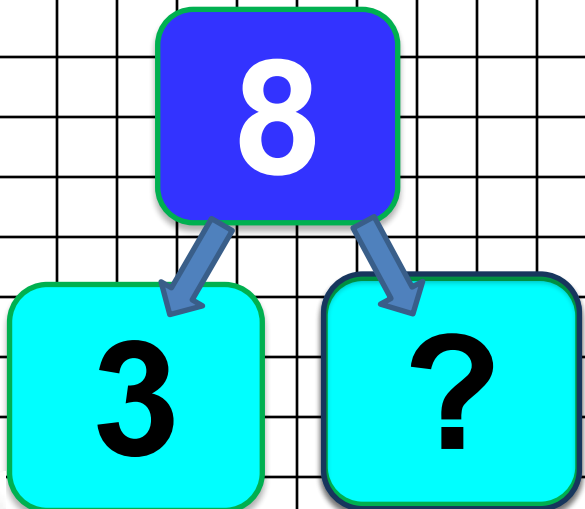
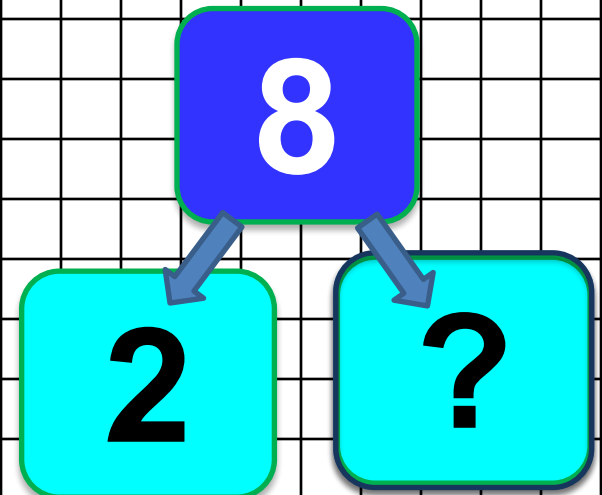
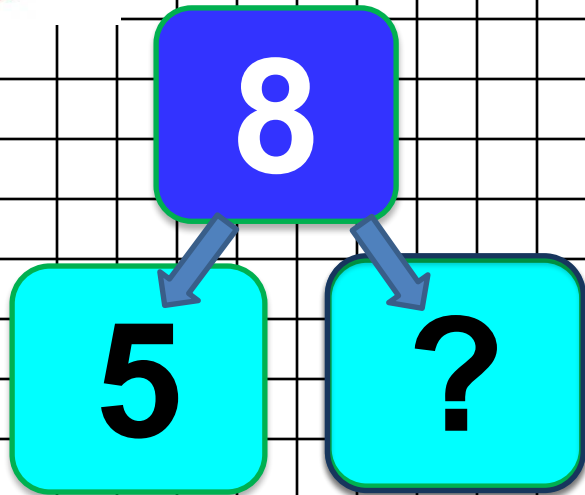








# Состав числа





9

7

?

9

5

?

9

3

?

9

?

4

9

?

8

9

?

6







$$1 + 5$$

$$7 + 1$$

$$8 + 2$$

$$7 + 2$$


$$3 + 6$$

$$1 + 9$$

$$6 + 4$$

$$8 + 1$$

$$5 + 4$$





$$7 + \dots = 9$$

$$3 + \dots = 6$$

$$4 + \dots = 7$$



$$6 - \dots = 3$$

$$9 - \dots = 7$$

$$7 - \dots = 4$$





$$4 + 5$$

$$3 + 4$$

$$2 + 6$$

$$4 + 4$$

$$5 + 3$$

$$6 + 3$$

$$2 + 7$$

$$3 + 7$$





$$\dots + 2 = 7$$

$$2 + \dots = 8$$

$$8 - \dots = 1$$

$$\dots + 6 = 9$$

$$\dots - 3 = 3$$

$$7 - \dots = 2$$

$$\dots - 4 = 6$$

$$8 - \dots = 4$$

$$9 - \dots = 7$$





$$2 + \dots = 8$$

$$5 + \dots = 8$$

$$4 + \dots = 7$$

$$6 + \dots = 9$$

$$3 + \dots = 9$$

$$4 + \dots = 6$$





$$8 - \dots = 3$$

$$8 - \dots = 2$$

$$9 - \dots = 2$$

$$6 - \dots = 3$$

$$9 - \dots = 3$$

$$9 - \dots = 4$$

$$7 - \dots = 4$$

$$8 - \dots = 4$$

$$7 - \dots = 5$$





[http://liubavyska.ru/\\_ph/64/2/610456886.jpg](http://liubavyska.ru/_ph/64/2/610456886.jpg) смайл

<http://mallishok.ru/wp-content/uploads/2014/10/d97939c9030a.png> девочка

<http://nachalo4ka.ru/vesolyie-rebyata-deti-shablonyi-dlya-prezentatsiy/> весёлые ребята

[http://img0.liveinternet.ru/images/attach/c/11/115/600/115600306\\_large\\_114.png](http://img0.liveinternet.ru/images/attach/c/11/115/600/115600306_large_114.png) учитель

[http://img0.liveinternet.ru/images/attach/c/9/112/15/112015112\\_4.png](http://img0.liveinternet.ru/images/attach/c/9/112/15/112015112_4.png) мальчик

<http://www.tico-rantis.ru/upload/iblock/6bd/6bdd948293665280015dd8f57a40d67d.jpg>

beer

