

«Не стыдно
не знать, стыдно
не учиться»

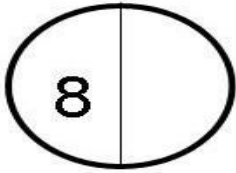
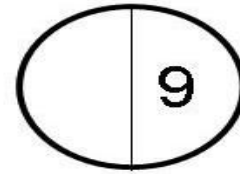
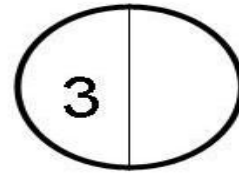
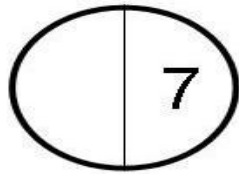
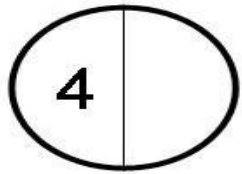
Дополните до 10:

4	*	9	*	5	*	6	*	2
*	7	*	8	*	1	*	3	*

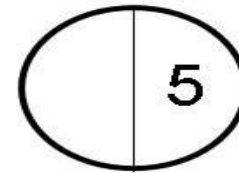
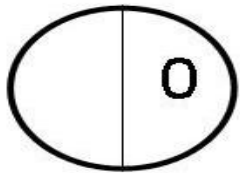
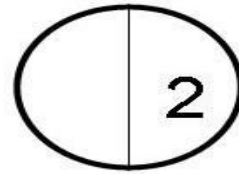
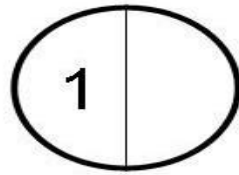
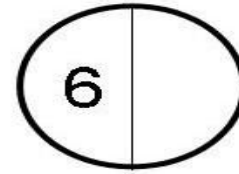
Проверка:

4	3	9	2	5	9	6	7	2
6	7	1	8	5	1	4	3	8

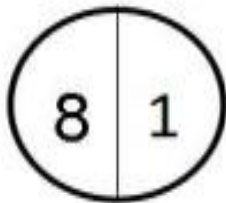
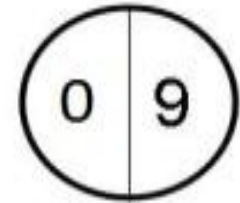
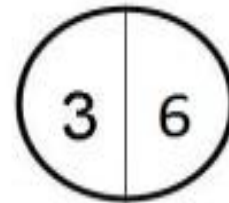
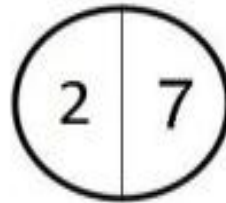
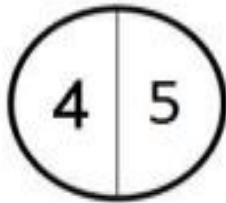
Запишите недостающие числа так,
чтобы в каждом круге в сумме
получилось число 9:



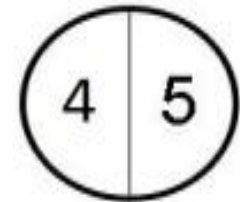
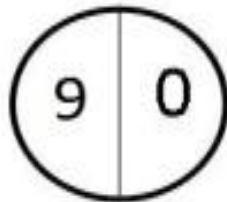
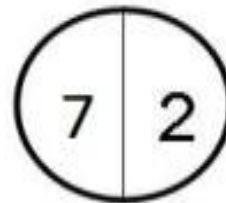
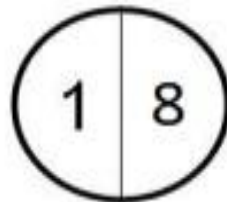
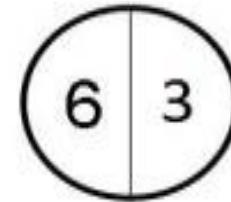
9



Проверка:



9



Вычислите:

$$3+2=...$$

$$4+3=...$$

$$7+1=...$$

$$9+4=...$$

Проверка

$$3+2=5$$

$$4+3=7$$

$$7+1=8$$

$$9+4=?$$

Самостоятельная работа

1.

$8+3=11$

$5+6=11$

$6+6=12$

$9+5=14$

$7+4=11$

$8+5=13$

2.

$7+5=12$

Ответ: 12 тетрадей лежит на столе.

3.

$2+9=11$

$8+6=14$

$8+4=12$

$9+3=12$

$4+9=13$

$7+8=15$